

## Your Task

Carefully read each question with your child.

Questions for discussion whilst your child completes the questions.

1a. What is the minute hand pointing to?

1b. What is the hour hand pointing to?

2. How many days are there in a week?

Use the images below to support your child.

## Minute Hand

The long hand points to the minutes past or to the hour.

## Hour Hand

The short hand points to the hour. If this hand is pointing in between hours, it is the earlier hour of the two.

## O'Clock

A new hour begins when the minute hand points to 12.

## Half Past

30 minutes into the hour.  
30 is half of 60.

## Quarter Past

15 minutes into the hour.  
15 is one quarter of 60.

## Quarter To

45 minutes into the hour and 15 minutes before a new hour begins.

## The Four Seasons

Autumn

September

October

November

Spring

March

April

May

Winter

December

January

February

Summer

June

July

August

Monday

Tuesday

Wednesday

Thursday

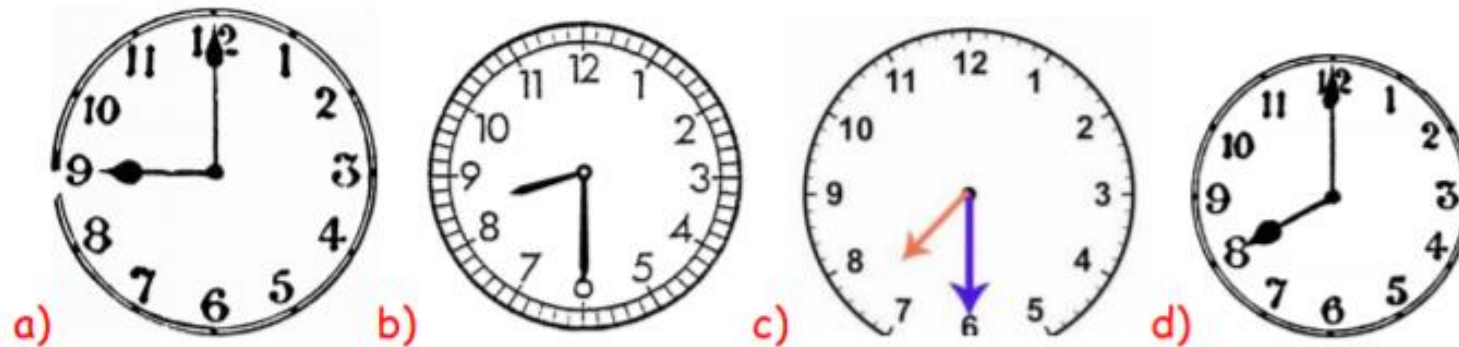
Friday

Saturday

Sunday

1. Sam leaves for school at 8 'clock. Jay leaves half an hour later than Sam.

Which clock shows when Jay leaves for school?



Explain why.

2. Which times are shorter than 1 week?

a. 1 year    b. 1 day    c. 1 minute    d. 1 hour    e. 1 month

3. Use a small clock to make the time 9 o'clock. In your book describe where the hands are.

4. Jackie is looking forward to the events marked on the calendar.

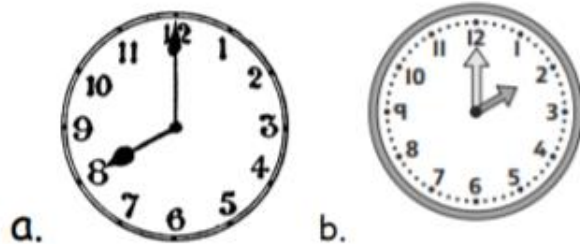
January						
Sun	Mon	Tue	Wed	Thurs	Fri	Sat
			1	2	3	4
5	6	7	8	9	10	11
12	13	14	15	16	17	18
19	20	21	22	23	24	25
26	27	28	29	30	31	

Use the clues to identify the date she carried out each activity.


- a) Jackie is going to a party at the weekend. This is \_\_\_\_ January.
- b) She is visiting her aunty on a Tuesday. This is \_\_\_\_ January.
- c) Three days after the party she is going swimming. This is \_\_\_\_ January.
- d) Near the end of the month she is going to the cinema. This is \_\_\_\_ January.

5. Which times are correct?

It's breakfast time!



It's dinner time!



6. One of these clock facts shows the same time as one the digital clock face. Which two letters match?

a.



d.

b.



e.

c.



f.

7. Read these statements. Are they true or false?

a. July is in the winter.

b. The day after Monday is Tuesday.

c. There are five days in a week.

d. One minute is shorter than one hour.

## Answers

1.



b)

2. Which times are shorter than 1 week?

b.1 day      c.1 minute      d.1 hour

3. Use a small clock to make the time 9 o'clock. In your book describe where the hands are.

The big hand is on 12. The small hand is on 9.

4. Jackie is looking forward to the events marked on the calendar.

January						
Sun	Mon	Tue	Wed	Thurs	Fri	Sat
			1	2	3	4
5	6	7	8	9	10	11
12	13	14	15	16	17	18
19	20	21	22	23	24	25
26	27	28	29	30	31	

Use the clues to identify the date she carried out each activity.

- a) Jackie is going to a party at the weekend. This is 11th January.
- b) She is visiting her aunty on a Tuesday. This is 7th January.
- c) Three days after the party she is going swimming. This is 14th January.
- d) Near the end of the month she is going to the cinema. This is 26th January.

5. Which times are correct?

It's breakfast time!



It's dinner time!



6. One of these clock facts shows the same time as one the digital clock face. Which two letters match? b and f

a.



d.

b.



e.

c.



f.

7. Read these statements. Are they true or false?

a. July is in the winter. False

b. The day after Monday is Tuesday. True

c. There are five days in a week. False

d. One minute is shorter than one hour. True





