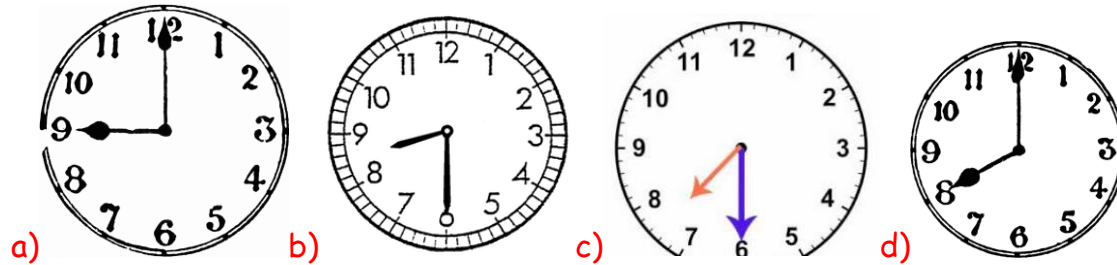


1. Sam leaves for school at 8 'clock. Jay leaves half an hour later than Sam.

Which clock shows when Jay leaves for school?



Explain why.

2. Which times are shorter than 1 week?

a. 1 year b. 1 day c. 1 minute d. 1 hour e. 1 month

3. Use a small clock to make the time 9 o'clock. In your book describe where the hands are.

4. Jackie is looking forward to the events marked on the calendar.

January						
Sun	Mon	Tue	Wed	Thurs	Fri	Sat
			1	2	3	4
5	6	7	8	9	10	11
12	13	14	15	16	17	18
19	20	21	22	23	24	25
26	27	28	29	30	31	

Use the clues to identify the date she carried out each activity.

a) Jackie is going to a party at the weekend. This is ____ January.

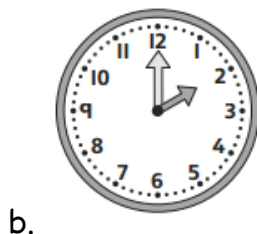

b) She is visiting her aunty on a Tuesday. This is ____ January.

c) Three days after the party she is going swimming. This is ____ January.

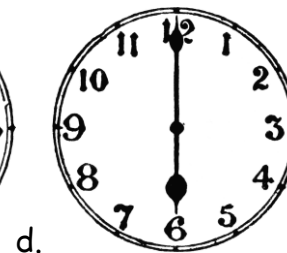
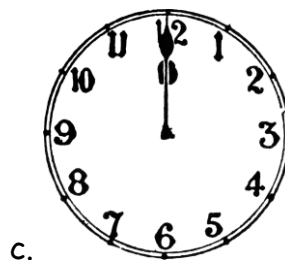
d) Near the end of the month she is going to the cinema. This is ____ January.

5. Which times are correct?

It's breakfast time!



It's dinner time!



6. One of these clock facts shows the same time as one the digital clock face. Which two letters match?

a.



d.

b.



e.

c.



f.

7. Read these statements. Are they true or false?

a. July is in the winter.

b. The day after Monday is Tuesday.

c. There are five days in a week.

d. One minute is shorter than one hour.

Answers

1.



b)

2. Which times are shorter than 1 week?

b.1 day c.1 minute d.1 hour

3. Use a small clock to make the time 9 o'clock. In your book describe where the hands are.

The big hand is on 12. The small hand is on 9.

4. Jackie is looking forward to the events marked on the calendar.

January						
Sun	Mon	Tue	Wed	Thurs	Fri	Sat
			1	2	3	4
5	6	7	8	9	10	11
12	13	14	15	16	17	18
19	20	21	22	23	24	25
26	27	28	29	30	31	

Use the clues to identify the date she carried out each activity.

a) Jackie is going to a party at the weekend. This is 11th January.


b) She is visiting her aunty on a Tuesday. This is 7th January.

c) Three days after the party she is going swimming. This is 14th January.

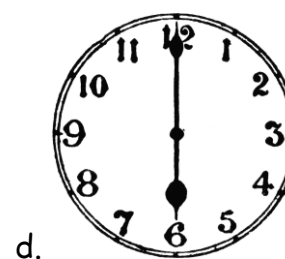
d) Near the end of the month she is going to the cinema. This is 26th January.

5. Which times are correct?

It's breakfast time!



It's dinner time!



6. One of these clock facts shows the same time as one the digital clock face. Which two letters match? b and f

a.



d.

b.



e.

c.



f.

7. Read these statements. Are they true or false?

a. July is in the winter. False

b. The day after Monday is Tuesday. True

c. There are five days in a week. False

d. One minute is shorter than one hour. True